

Taktik-Training – Vorteil in ein und zwei Zügen

Notiere die Lösungen zu den Aufgaben 1-4 (1 Zug) & 5-9 (2 Züge)

Name: _____


JS Z3-L16

Datum: 05.01.2026 _____


4	D	Drohung
3	A	Angriff
2	S	Schlagen
1	S	Schach




Sportvereinigung
Rommelshausen e.V.
...gemeinsam in die Zukunft!




1. Vi1 - Schwarz am Zug




4. Vi1 - Schwarz am Zug




7. Vi2 - Weiß am Zug




2. Vi1 - Schwarz am Zug




5. Vi2 - Weiß am Zug




8. Vi2 - Weiß am Zug



3. Vi1 - Schwarz am Zug



6. Vi2 - Weiß am Zug



9. Vi2 - Schwarz am Zug